


Name: _____

Schnelles Rechnen

ZR 1 000 000

Blatt 11 A

Wie viele Aufgaben schaffst du in _____ Minuten ?



$18\ 000 : 9 = \underline{\hspace{2cm}}$

$16 : 2 = \underline{\hspace{2cm}}$

$320 : 4 = \underline{\hspace{2cm}}$

$240\ 000 : 6 = \underline{\hspace{2cm}}$

$6\ 300 : 7 = \underline{\hspace{2cm}}$

$25\ 000 : 5 = \underline{\hspace{2cm}}$

$28 : 7 = \underline{\hspace{2cm}}$

$150 : 3 = \underline{\hspace{2cm}}$

$1\ 800 : 6 = \underline{\hspace{2cm}}$

$360\ 000 : 4 = \underline{\hspace{2cm}}$

$81\ 000 : 9 = \underline{\hspace{2cm}}$

$640\ 000 : 8 = \underline{\hspace{2cm}}$

$280 : 4 = \underline{\hspace{2cm}}$

$30 : 5 = \underline{\hspace{2cm}}$

$600 : 6 = \underline{\hspace{2cm}}$

$320\ 000 : 8 = \underline{\hspace{2cm}}$

$21\ 000 : 3 = \underline{\hspace{2cm}}$

$4\ 900 : 7 = \underline{\hspace{2cm}}$

$35 : 5 = \underline{\hspace{2cm}}$

$000\ 120 : 2 = \underline{\hspace{2cm}}$

$5\ 600 : 8 = \underline{\hspace{2cm}}$

$450 : 5 = \underline{\hspace{2cm}}$

$54\ 000 : 9 = \underline{\hspace{2cm}}$

$270\ 000 : 3 = \underline{\hspace{2cm}}$

$24 : 8 = \underline{\hspace{2cm}}$

$3\ 600 : 9 = \underline{\hspace{2cm}}$

$540\ 000 : 6 = \underline{\hspace{2cm}}$


$180 : 2 = \underline{\hspace{2cm}}$

$16 : 4 = \underline{\hspace{2cm}}$

$35\ 000 : 7 = \underline{\hspace{2cm}}$

Ich habe _____ Aufgaben geschafft.

Das finde ich:




Name: _____

Schnelles Rechnen

ZR 1 000 000

Blatt 11 B

Wie viele Aufgaben schaffst du in _____ Minuten ?



$14 : 2 = \underline{\hspace{2cm}}$

$280 : 4 = \underline{\hspace{2cm}}$

$1\,400 : 7 = \underline{\hspace{2cm}}$

$360\,000 : 6 = \underline{\hspace{2cm}}$

$12\,000 : 4 = \underline{\hspace{2cm}}$

$12 : 2 = \underline{\hspace{2cm}}$

$180 : 6 = \underline{\hspace{2cm}}$

$1\,200 : 3 = \underline{\hspace{2cm}}$

$560\,000 : 8 = \underline{\hspace{2cm}}$

$45\,000 : 5 = \underline{\hspace{2cm}}$

$2\,400 : 3 = \underline{\hspace{2cm}}$

$21 : 3 = \underline{\hspace{2cm}}$

$250 : 5 = \underline{\hspace{2cm}}$

$4\,000 : 8 = \underline{\hspace{2cm}}$

$320\,000 : 8 = \underline{\hspace{2cm}}$

$200 : 4 = \underline{\hspace{2cm}}$

$16\,000 : 2 = \underline{\hspace{2cm}}$

$27\,000 : 9 = \underline{\hspace{2cm}}$

$35 : 7 = \underline{\hspace{2cm}}$

$350\,000 : 5 = \underline{\hspace{2cm}}$

$540 : 9 = \underline{\hspace{2cm}}$

$42\,000 : 6 = \underline{\hspace{2cm}}$

$280\,000 : 7 = \underline{\hspace{2cm}}$

$400\,000 : 5 = \underline{\hspace{2cm}}$

$1\,000 : 2 = \underline{\hspace{2cm}}$

$6\,300 : 9 = \underline{\hspace{2cm}}$

$48\,000 : 6 = \underline{\hspace{2cm}}$

$15 : 3 = \underline{\hspace{2cm}}$

$16 : 4 = \underline{\hspace{2cm}}$

$420 : 7 = \underline{\hspace{2cm}}$

Ich habe _____ Aufgaben geschafft.

Das finde ich:

