


Name: _____

Schnelles Rechnen

ZR 1 000 000

Blatt 6 A


Wie viele Aufgaben schaffst du in _____ Minuten ?



- | | |
|----------------------------------|-------------------------------|
| $40\ 000 - 40 =$ _____ | $500\ 000 + 50\ 000 =$ _____ |
| $10\ 000 + 1 =$ _____ | $10\ 000 - 1 =$ _____ |
| $60\ 000 - 6\ 000 =$ _____ | $3\ 000 + 3\ 000 =$ _____ |
| $10\ 000 + 1\ 000 =$ _____ | $10\ 000 - 1\ 000 =$ _____ |
| $1\ 000\ 000 - 100\ 000 =$ _____ | $100\ 000 + 10\ 000 =$ _____ |
| $3\ 000 - 30 =$ _____ | $600\ 000 + 6 =$ _____ |
| $200\ 000 + 2\ 000 =$ _____ | $1\ 000\ 000 - 100 =$ _____ |
| $600\ 000 - 6 =$ _____ | $100\ 000 + 1 =$ _____ |
| $1\ 000 + 100 =$ _____ | $90\ 000 - 9 =$ _____ |
| $70\ 000 - 700 =$ _____ | $30\ 000 + 300 =$ _____ |
| $100\ 000 - 100 =$ _____ | $20\ 000 + 200 =$ _____ |
| $8\ 000 + 800 =$ _____ | $100\ 000 - 100\ 000 =$ _____ |
| $6\ 000 - 6 =$ _____ | $80\ 000 + 8\ 000 =$ _____ |
| $10\ 000 + 100 =$ _____ | $100\ 000 - 10 =$ _____ |
| $500\ 000 - 5\ 000 =$ _____ | $4\ 000 + 4 =$ _____ |

Ich habe _____ Aufgaben geschafft.

Das finde ich:




Name: _____

Schnelles Rechnen

ZR 1 000 000

Blatt 6 B

Wie viele Aufgaben schaffst du in



Minuten ?

$100\,000 - 10\,000 = \underline{\hspace{2cm}}$

$300\,000 + 300 = \underline{\hspace{2cm}}$

$100\,000 + 100 = \underline{\hspace{2cm}}$

$600\,000 - 60\,000 = \underline{\hspace{2cm}}$

$1\,000\,000 - 1\,000 = \underline{\hspace{2cm}}$

$100\,000 + 100\,000 = \underline{\hspace{2cm}}$

$1\,000 + 10 = \underline{\hspace{2cm}}$

$80\,000 - 8\,000 = \underline{\hspace{2cm}}$

$100\,000 - 10 = \underline{\hspace{2cm}}$

$20\,000 + 20 = \underline{\hspace{2cm}}$

$100\,000 - 1 = \underline{\hspace{2cm}}$

$1\,000 + 1 = \underline{\hspace{2cm}}$

$100\,000 + 1\,000 = \underline{\hspace{2cm}}$

$400\,000 - 400 = \underline{\hspace{2cm}}$

$70\,000 - 7 = \underline{\hspace{2cm}}$

$8\,000 + 80 = \underline{\hspace{2cm}}$

$90\,000 + 9 = \underline{\hspace{2cm}}$

$10\,000 - 10 = \underline{\hspace{2cm}}$

$100\,000 - 1\,000 = \underline{\hspace{2cm}}$

$10\,000 + 10 = \underline{\hspace{2cm}}$

$1\,000 - 100 = \underline{\hspace{2cm}}$

$70\,000 + 700 = \underline{\hspace{2cm}}$

$10\,000 + 1\,000 = \underline{\hspace{2cm}}$

$300\,000 - 30 = \underline{\hspace{2cm}}$

$1\,000\,000 - 10\,000 = \underline{\hspace{2cm}}$

$100\,000 + 10 = \underline{\hspace{2cm}}$

$1\,000 + 1\,000 = \underline{\hspace{2cm}}$

$10\,000 - 100 = \underline{\hspace{2cm}}$

$5\,000 - 500 = \underline{\hspace{2cm}}$

$40\,000 + 4\,000 = \underline{\hspace{2cm}}$

Ich habe _____ Aufgaben geschafft.

Das finde ich:

