

Kettenaufgaben

30 Aufgaben mit Lösungen

Bilder:

Kate Hadfield und Marina Ermakova

45

$$8 \cdot 5 + 15 - 39 + 29$$

Rechne die Kettenaufgabe.

$$8 \cdot 7 + 15 - 34 + 19$$

Rechne die Kettenaufgabe.

$$9 \cdot 4 + 26 - 18 + 39$$

Rechne die Kettenaufgabe.

$$6 \cdot 9 + 34 - 29 + 38$$

Rechne die Kettenaufgabe.

$$5 \cdot 6 + 27 - 16 + 53$$

Rechne die Kettenaufgabe.

$$6 \cdot 8 + 22 - 39 + 17$$

Rechne die Kettenaufgabe.

$$7 \cdot 6 + 45 - 48 + 29$$

Rechne die Kettenaufgabe.

$$5 \cdot 5 + 36 - 18 + 49$$

56

97

48

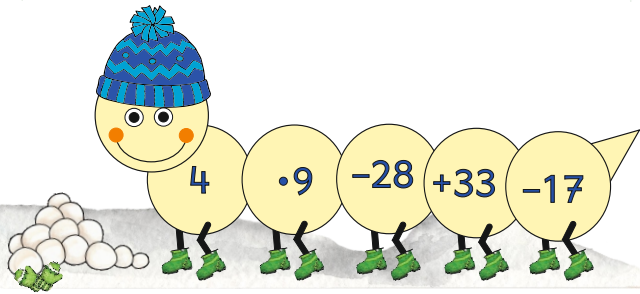
92

83

94

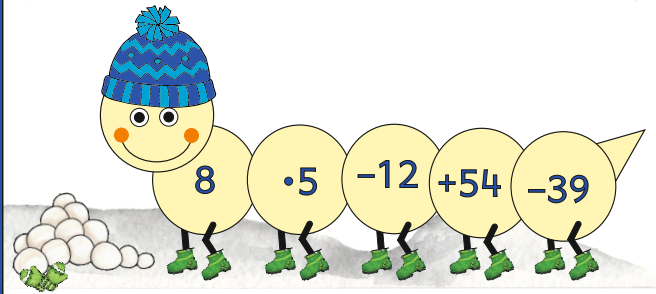
68

Rechne die Kettenaufgabe.




www.mathemonsterchen.de

Rechne die Kettenaufgabe.




www.mathemonsterchen.de

Rechne die Kettenaufgabe.




www.mathemonsterchen.de

Rechne die Kettenaufgabe.



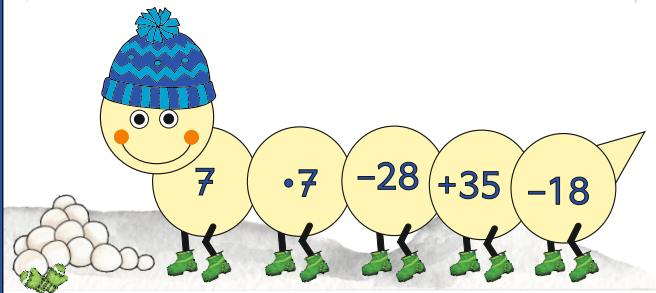
www.mathemonsterchen.de

Rechne die Kettenaufgabe.




www.mathemonsterchen.de

Rechne die Kettenaufgabe.



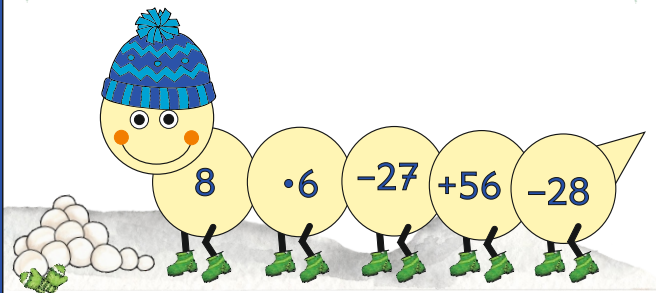
www.mathemonsterchen.de

Rechne die Kettenaufgabe.



www.mathemonsterchen.de

Rechne die Kettenaufgabe.



www.mathemonsterchen.de

43

24

17

40

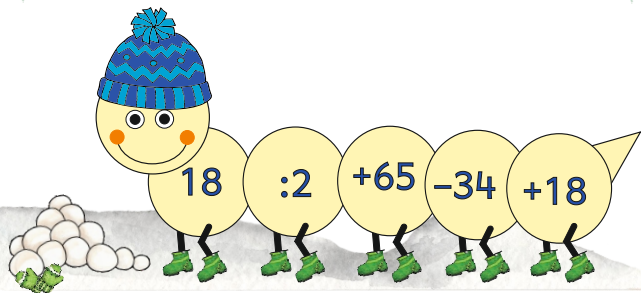
38

36

49


27

Rechne die Kettenaufgabe.




www.mathemonsterchen.de

Rechne die Kettenaufgabe.



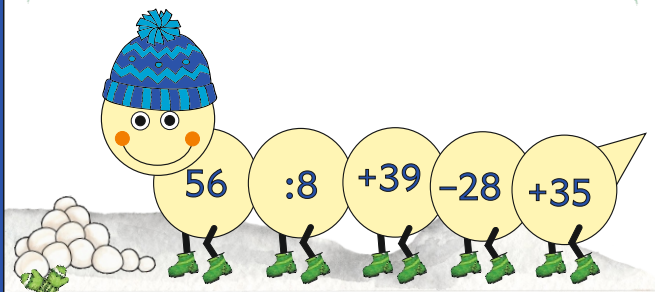
www.mathemonsterchen.de

Rechne die Kettenaufgabe.



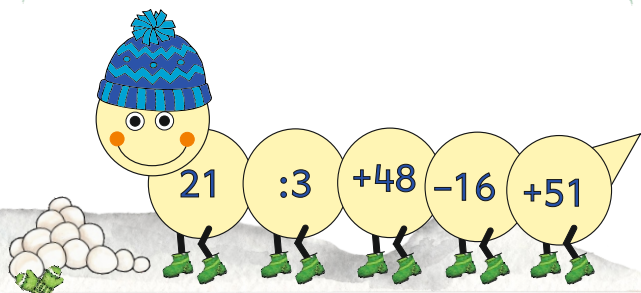
www.mathemonsterchen.de

Rechne die Kettenaufgabe.




www.mathemonsterchen.de

Rechne die Kettenaufgabe.




www.mathemonsterchen.de

Rechne die Kettenaufgabe.



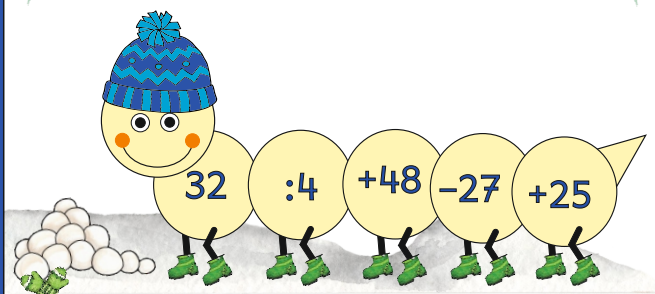
www.mathemonsterchen.de

Rechne die Kettenaufgabe.



www.mathemonsterchen.de

Rechne die Kettenaufgabe.



www.mathemonsterchen.de

31

58

53

70


49

90

54


83

Rechne die Kettenaufgabe.




www.mathemonsterchen.de

Rechne die Kettenaufgabe.




www.mathemonsterchen.de

Rechne die Kettenaufgabe.




www.mathemonsterchen.de

Rechne die Kettenaufgabe.




www.mathemonsterchen.de

Rechne die Kettenaufgabe.




www.mathemonsterchen.de

Rechne die Kettenaufgabe.




www.mathemonsterchen.de

Rechne die Kettenaufgabe.



www.mathemonsterchen.de

Rechne die Kettenaufgabe.



www.mathemonsterchen.de

39

47

36

21

28

34

26