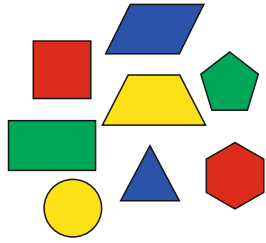



Die Maus
benennt Flächen.




www.mathemonsterchen.de


ein roter
Kreis




ein gelbes
Rechteck




ein blaues
Fünfeck



ein grünes
Dreieck




ein gelbes
Quadrat




ein rotes
Fünfeck






ein blaues
Trapez




ein gelbes
Dreieck




ein rotes
Quadrat




ein grüner
Kreis




ein blaues
Sechseck



ein gelber
Kreis




ein blaues
Quadrat




ein grünes
Trapez




ein rotes
Dreieck



ein gelbes
Fünfeck




ein blauer
Kreis




ein blaues
Rechteck




ein rotes
Sechseck




ein gelbes
Trapez



ein grünes
Fünfeck



ein grünes
Quadrat




ein blaues
Parallelogramm




ein grünes
Rechteck




ein gelbes
Sechseck



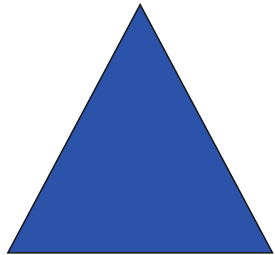
ein rotes
Parallelogramm




ein grünes
Parallelogramm



ein blaues
Dreieck




ein rotes
Rechteck




ein rotes
Trapez



ein gelbes
Parallelogramm



ein grünes
Sechseck



ENDE