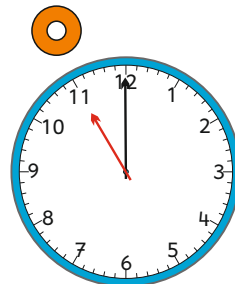
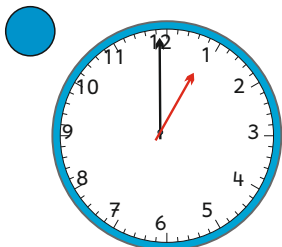
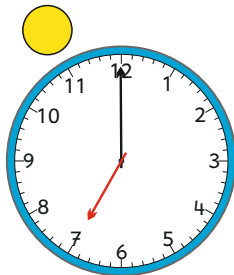
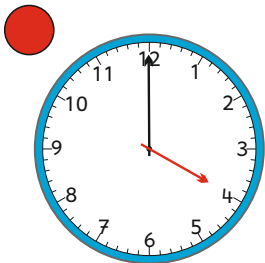
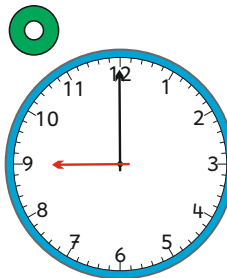
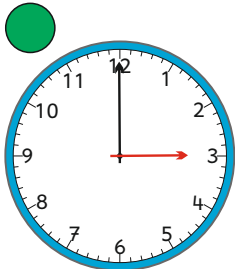
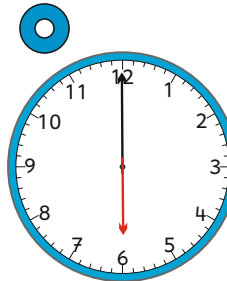
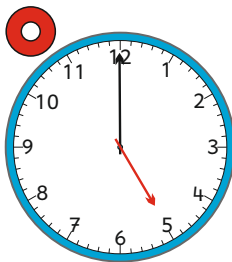
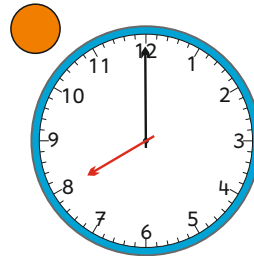
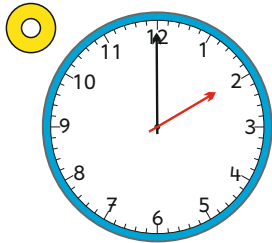


# Wie spät ist es ? (1)



4 Uhr

11 Uhr

6 Uhr

8 Uhr

1 Uhr






3 Uhr

9 Uhr

7 Uhr

2 Uhr

5 Uhr



## Wie spät ist es ? (2)

The image contains 10 analog clocks, each with a colored dot next to it. The times shown on the clocks are as follows:

- Top-left: Blue dot, 9:00
- Top-right: Green dot, 8:00
- Middle-left: Yellow dot, 10:00
- Middle-right: Red dot, 2:00
- Second row left: Orange dot, 4:00
- Second row right: Yellow dot, 1:00
- Third row left: Green dot, 12:00
- Third row right: Red dot, 4:00
- Bottom-left: Blue dot, 10:30
- Bottom-right: Orange dot, 6:00

14 Uhr

24 Uhr

16 Uhr

18 Uhr

21 Uhr






13 Uhr

20 Uhr

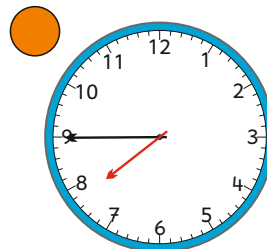
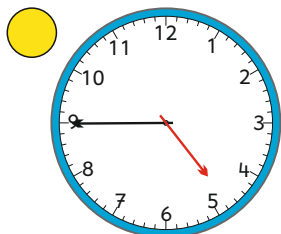
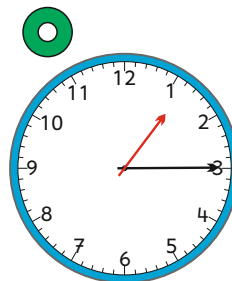
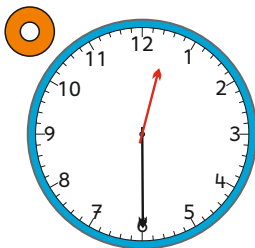
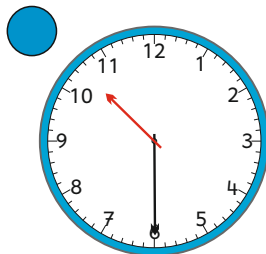
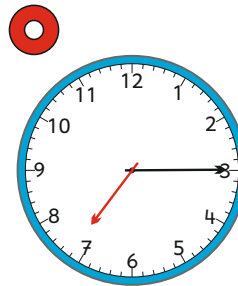

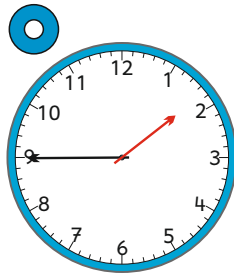
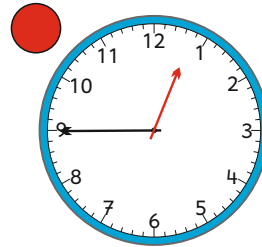
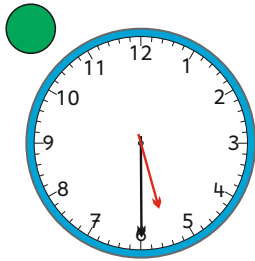
17 Uhr

23 Uhr

22 Uhr



## Wie spät ist es ? (3)



01.45 Uhr

07.45 Uhr

12.30 Uhr

07.15 Uhr

05.30 Uhr






04.45 Uhr

10.30 Uhr

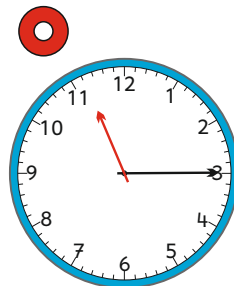
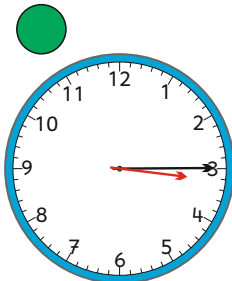
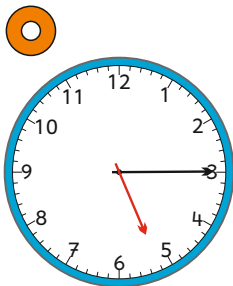
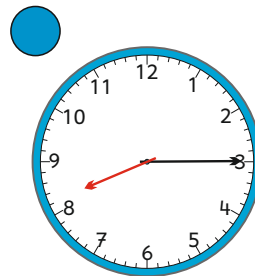
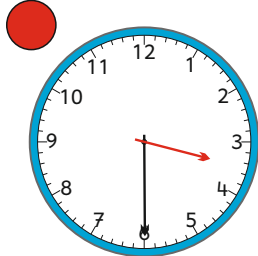
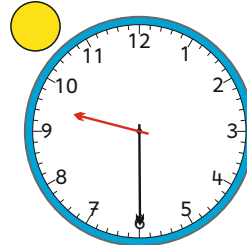
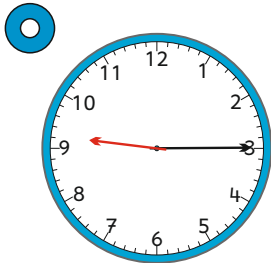
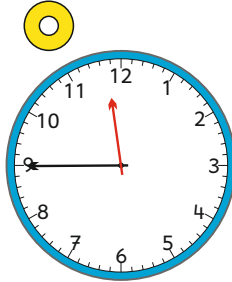
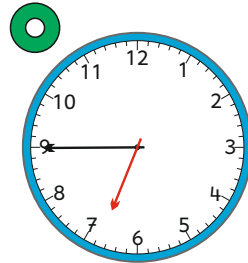
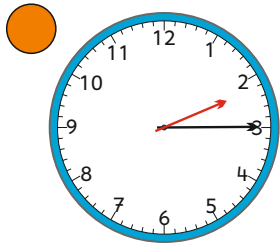
12.45 Uhr

06.30 Uhr

01.15 Uhr



## Wie spät ist es ? (4)



03.30 Uhr

11.45 Uhr

05.15 Uhr

02.15 Uhr

09.15 Uhr


08.15 Uhr

06.45 Uhr

09.30 Uhr

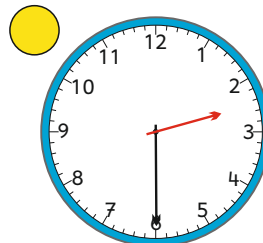
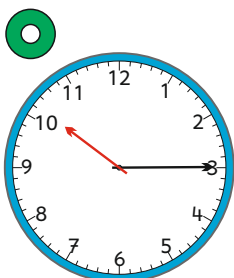
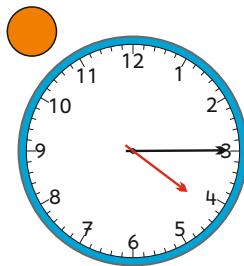
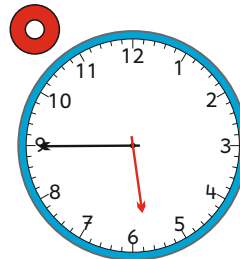
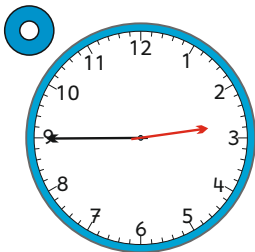
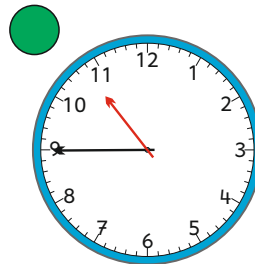
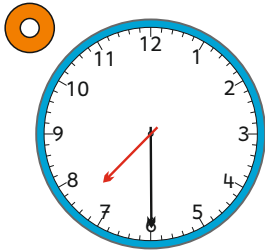
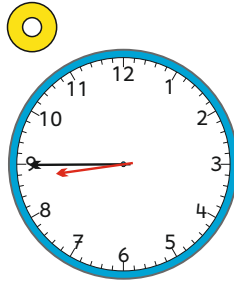
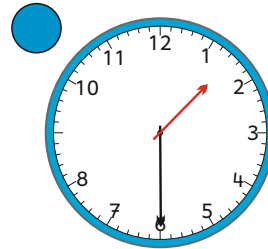
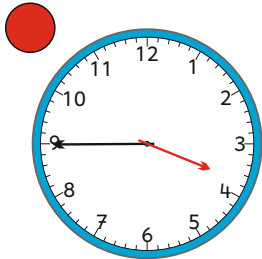
11.15 Uhr

03.15 Uhr





## Wie spät ist es ? (5)



01.30 Uhr

10.15 Uhr

02.30 Uhr

02.45 Uhr

03.45 Uhr






07.30 Uhr

05.45 Uhr

08.45 Uhr

10.45 Uhr

04.15 Uhr



# Wie spät ist es ? (6)

02.50 Uhr

07.40 Uhr

02.20 Uhr

04.10 Uhr

07.10 Uhr


07.20 Uhr


02.40 Uhr

07.50 Uhr

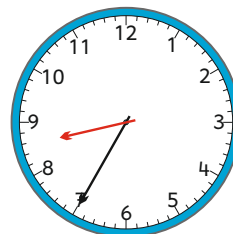
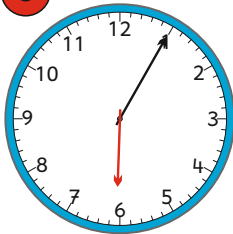
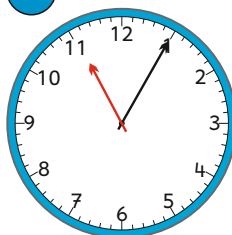
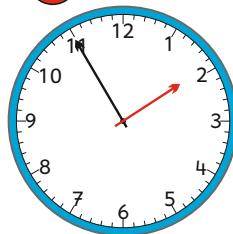
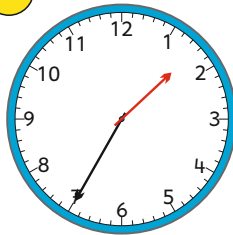
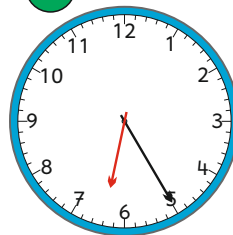
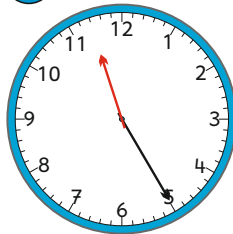
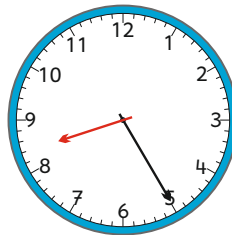
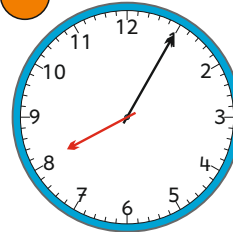
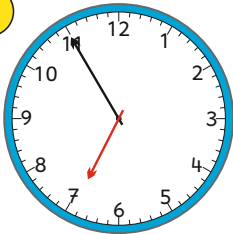
04.40 Uhr

02.10 Uhr





# Wie spät ist es ? (7)



06.25 Uhr

06.05 Uhr

08.35 Uhr

08.05 Uhr

01.35 Uhr

06.55 Uhr

11.25 Uhr

01.55 Uhr

11.05 Uhr

08.25 Uhr

